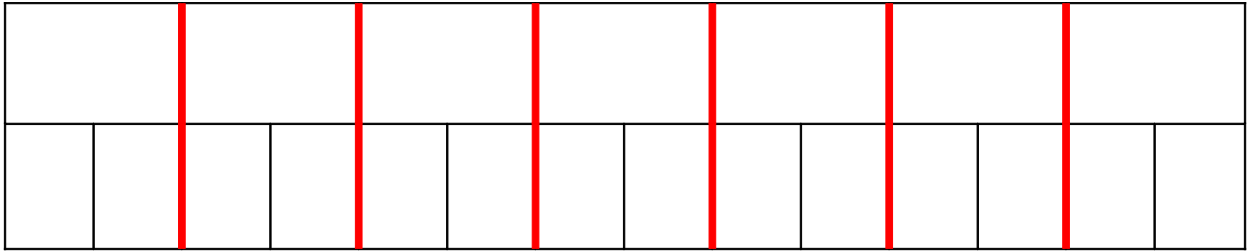


## Les unités agraires.

un hectare = 1 ha = 1 hm<sup>2</sup>


un are = 1 a = 1 dam<sup>2</sup>

Exprime chaque aire en m<sup>2</sup>




$$8,75 \text{ ha} = \text{m}^2$$

Exprime chaque aire en m<sup>2</sup>



$$0,087 \text{ a} = \text{m}^2$$

Exprime chaque aire en m<sup>2</sup>



$$0,05524 \text{ ha} = \text{m}^2$$

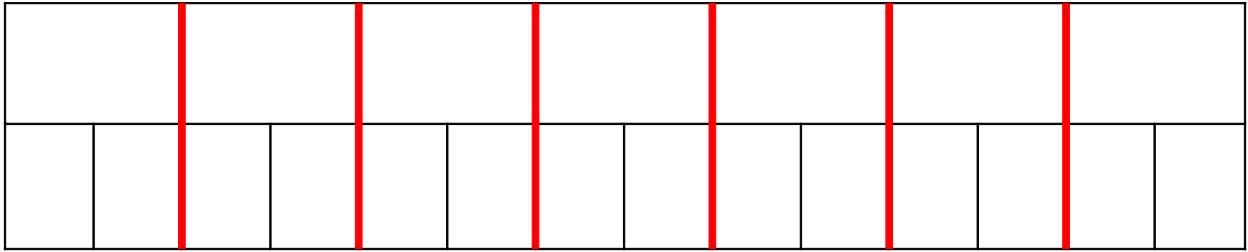


Les unités agraires.

un hectare = 1 ha = 1 hm<sup>2</sup>

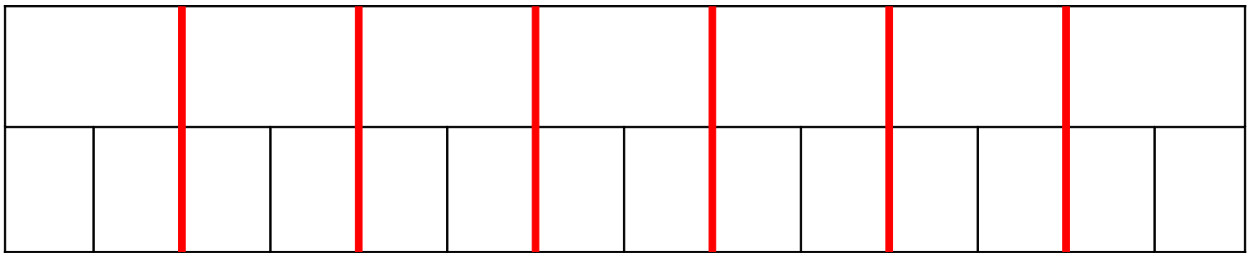
un are = 1 a = 1 dam<sup>2</sup>

Exprime chaque aire en m<sup>2</sup>




$$7,809 \text{ a} = \quad \text{m}^2$$

Exprime chaque aire en m<sup>2</sup>



$$71,5 \text{ ha} = \quad \text{m}^2$$

Exprime chaque aire en m<sup>2</sup>



$$1200 \text{ a} = \quad \text{m}^2$$

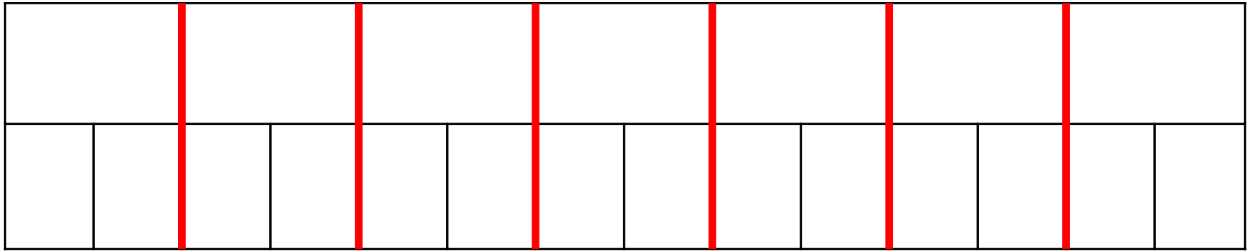


## Les unités agraires.

un hectare = 1 ha = 1 hm<sup>2</sup>

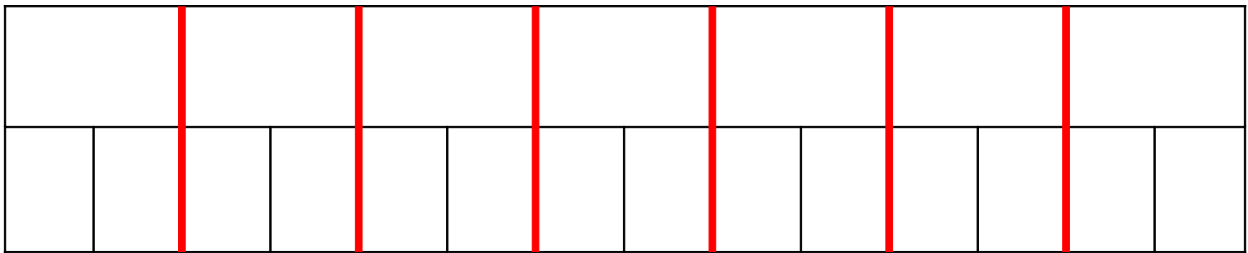
un are = 1 a = 1 dam<sup>2</sup>

Exprime chaque aire en m<sup>2</sup>




$$7,45 \text{ ha} = \quad \text{m}^2$$

Exprime chaque aire en m<sup>2</sup>




$$300 \text{ a} = \quad \text{m}^2$$

Exprime chaque aire en m<sup>2</sup>



$$0,53 \text{ ha} = \quad \text{m}^2$$

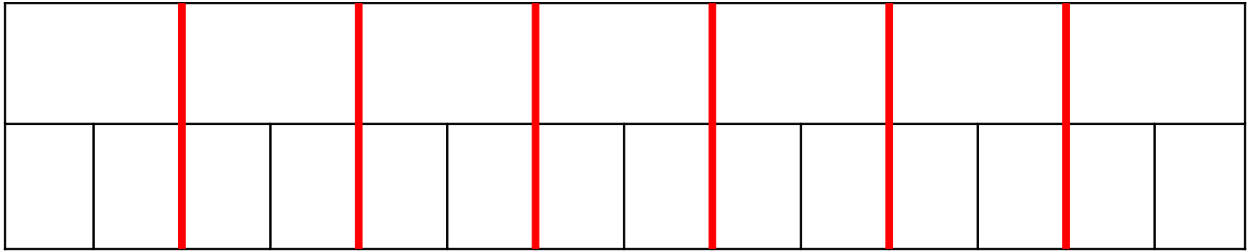


Les unités agraires.

un hectare = 1 ha = 1 hm<sup>2</sup>

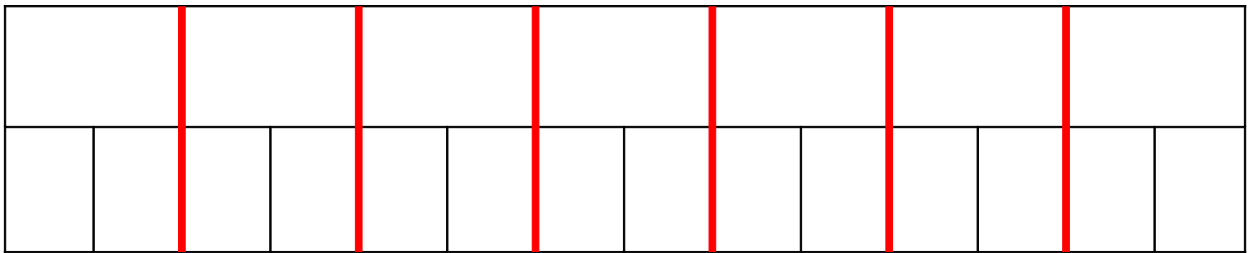
un are = 1 a = 1 dam<sup>2</sup>

Exprime chaque aire en m<sup>2</sup>




$$52 \text{ a} = \quad \text{m}^2$$

Exprime chaque aire en m<sup>2</sup>




$$5,0525 \text{ ha} = \quad \text{m}^2$$

Exprime chaque aire en m<sup>2</sup>



$$29 \text{ a} = \quad \text{m}^2$$

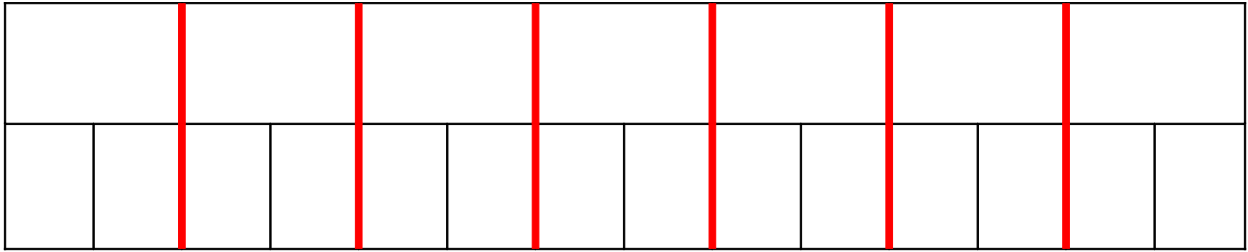


## Les unités agraires.

un hectare = 1 ha = 1 hm<sup>2</sup>

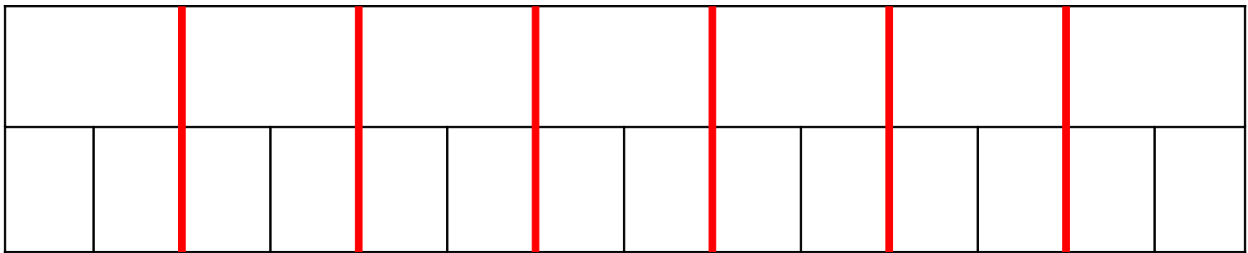
un are = 1 a = 1 dam<sup>2</sup>

Exprime chaque aire en m<sup>2</sup>




$$4,4539 \text{ ha} = \quad \text{m}^2$$

Exprime chaque aire en m<sup>2</sup>




$$600 \text{ a} = \quad \text{m}^2$$

Exprime chaque aire en m<sup>2</sup>



$$6,5 \text{ ha} = \quad \text{m}^2$$

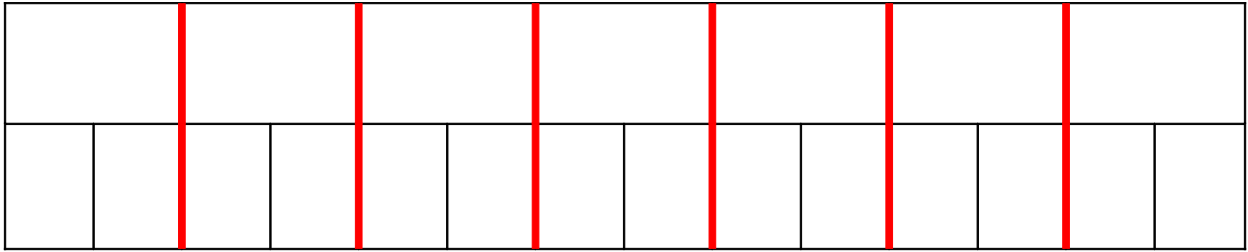


Les unités agraires.

un hectare = 1 ha = 1 hm<sup>2</sup>

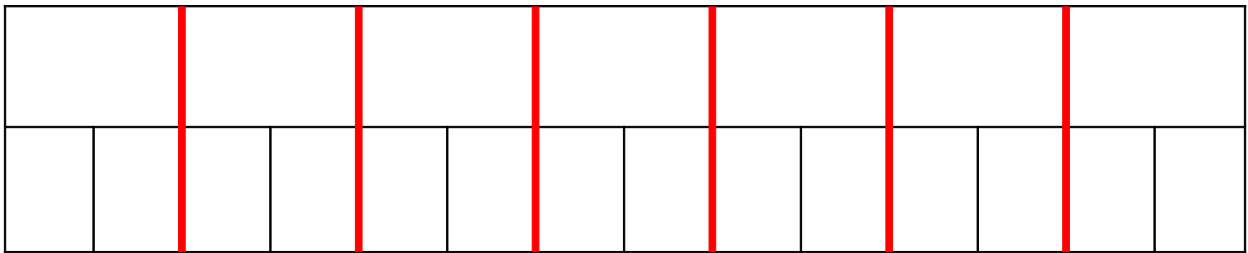
un are = 1 a = 1 dam<sup>2</sup>

Exprime chaque aire en m<sup>2</sup>




$$46,2 \text{ a} = \quad \text{m}^2$$

Exprime chaque aire en m<sup>2</sup>



$$1,5 \text{ ha} = \quad \text{m}^2$$

Exprime chaque aire en m<sup>2</sup>



$$41 \text{ a} = \quad \text{m}^2$$

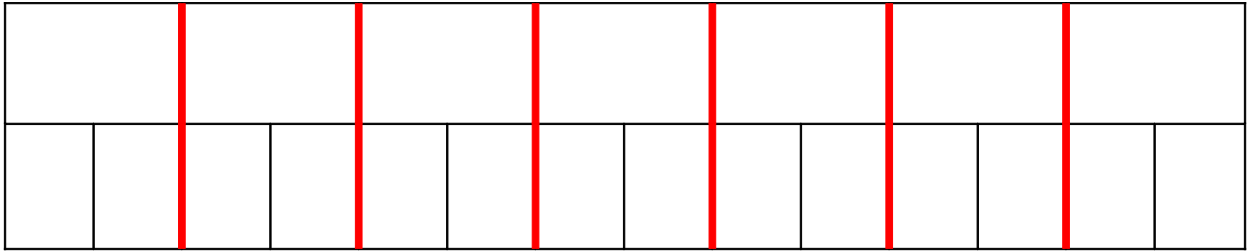


## Les unités agraires.

un hectare = 1 ha = 1 hm<sup>2</sup>

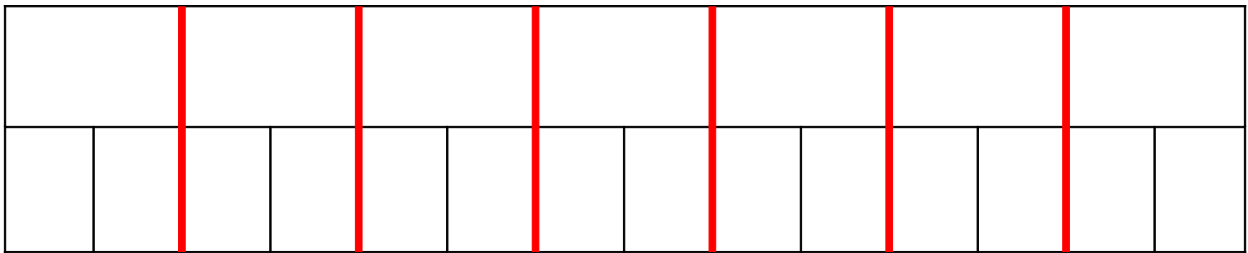
un are = 1 a = 1 dam<sup>2</sup>

Exprime chaque aire en m<sup>2</sup>




$$17 \text{ ha} = \quad \text{m}^2$$

Exprime chaque aire en m<sup>2</sup>




$$0,006 \text{ a} = \quad \text{m}^2$$

Exprime chaque aire en m<sup>2</sup>



$$8,3 \text{ ha} = \quad \text{m}^2$$

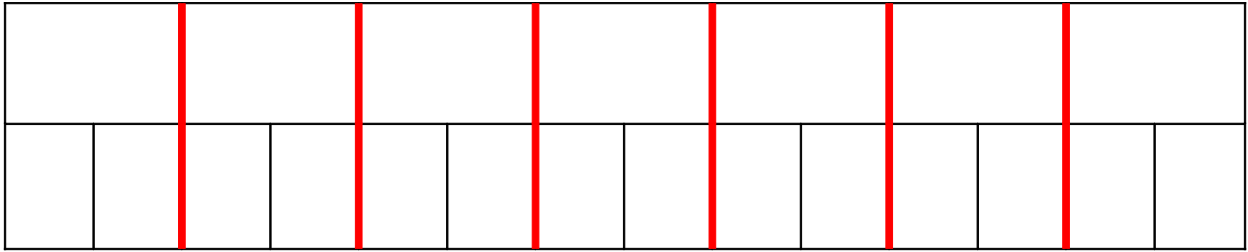


Les unités agraires.

un hectare = 1 ha = 1 hm<sup>2</sup>

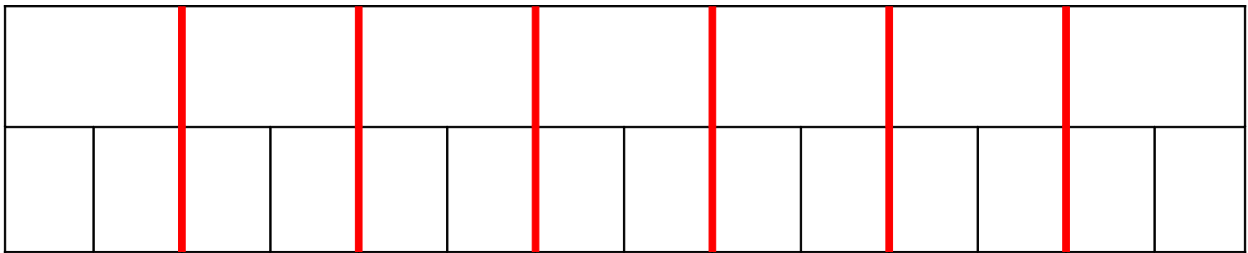
un are = 1 a = 1 dam<sup>2</sup>

Exprime chaque aire en m<sup>2</sup>




$$8,05 \text{ a} = \quad \text{m}^2$$

Exprime chaque aire en m<sup>2</sup>




$$870 \text{ ha} = \quad \text{m}^2$$

Exprime chaque aire en m<sup>2</sup>



$$1200 \text{ a} = \quad \text{m}^2$$



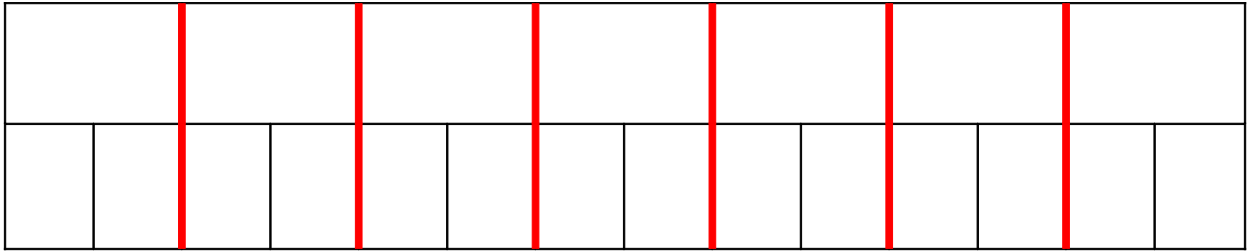


## Les unités agraires.

un hectare = 1 ha = 1 hm<sup>2</sup>

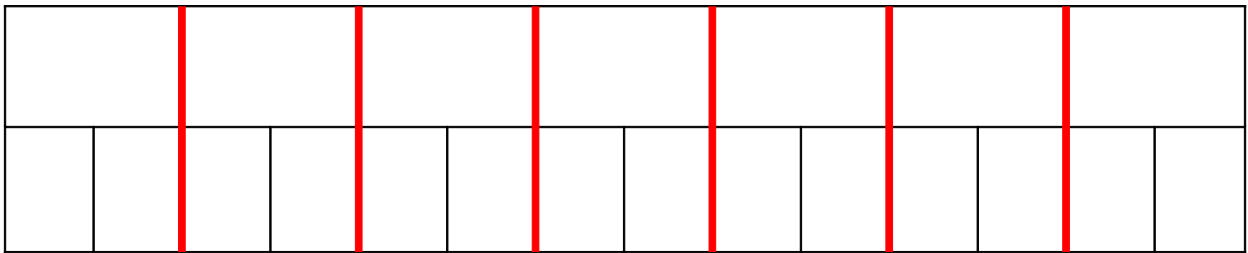
un are = 1 a = 1 dam<sup>2</sup>

Exprime chaque aire en m<sup>2</sup>




$$0,025 \text{ ha} = \quad \text{m}^2$$

Exprime chaque aire en m<sup>2</sup>



$$7,6 \text{ a} = \quad \text{m}^2$$

Exprime chaque aire en m<sup>2</sup>



$$0,761 \text{ ha} = \quad \text{m}^2$$

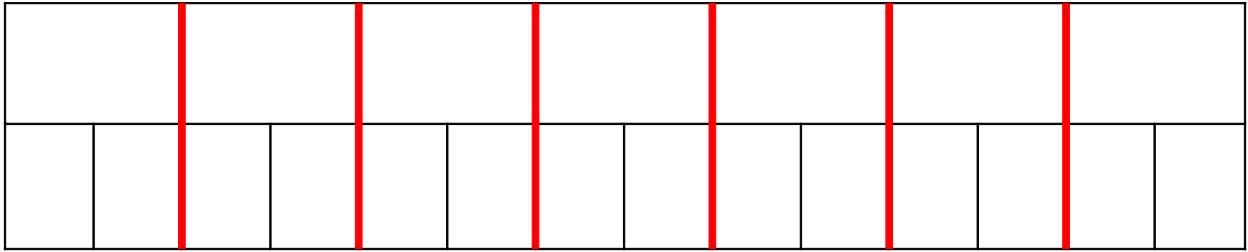


Les unités agraires.

un hectare = 1 ha = 1 hm<sup>2</sup>

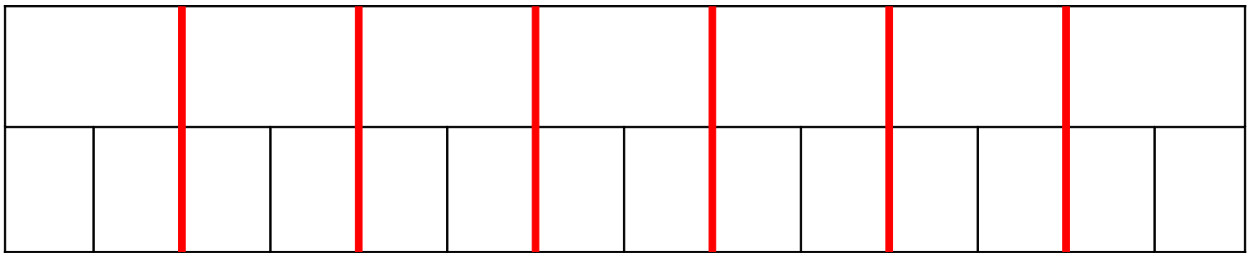
un are = 1 a = 1 dam<sup>2</sup>

Exprime chaque aire en m<sup>2</sup>




$$8,25 \text{ a} = \quad \text{m}^2$$

Exprime chaque aire en m<sup>2</sup>




$$0,7 \text{ ha} = \quad \text{m}^2$$

Exprime chaque aire en m<sup>2</sup>



$$157,7 \text{ a} = \quad \text{m}^2$$

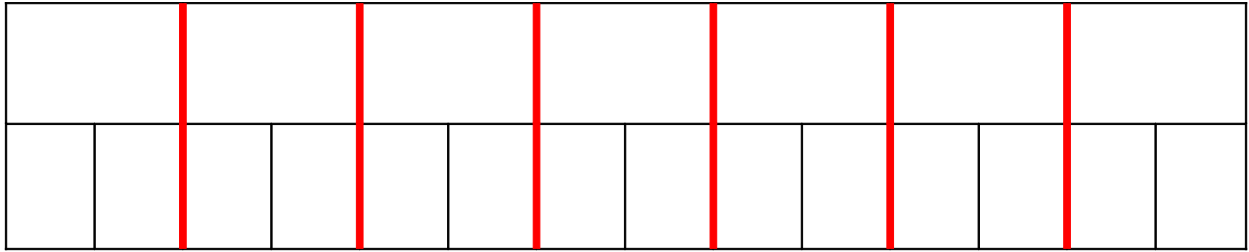


## Les unités agraires.

un hectare = 1 ha = 1 hm<sup>2</sup>

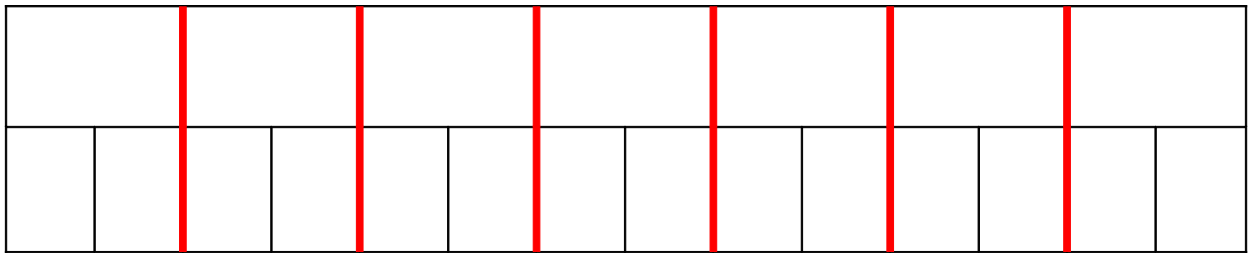
un are = 1 a = 1 dam<sup>2</sup>

Exprime chaque aire en m<sup>2</sup>




$$0,75 \text{ ha} = \quad \text{m}^2$$

Exprime chaque aire en m<sup>2</sup>




$$9,61 \text{ a} = \quad \text{m}^2$$

Exprime chaque aire en m<sup>2</sup>



$$157,7 \text{ ha} = \quad \text{m}^2$$



Les unités agraires.

un hectare = 1 ha = 1 hm<sup>2</sup>

un are = 1 a = 1 dam<sup>2</sup>

Exprime chaque aire en m<sup>2</sup>


$$971346 \text{ a} = \text{ m}^2$$

Exprime chaque aire en m<sup>2</sup>


$$120 \text{ ha} = \text{ m}^2$$

Exprime chaque aire en m<sup>2</sup>


$$145000 \text{ a} = \text{ m}^2$$