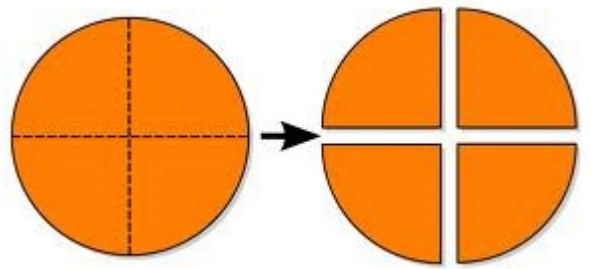


# Les fractions



Ecris ces nombres entiers  
sous forme de fractions.

$$1 = \frac{\quad}{3}$$

$$6 = \frac{\quad}{5}$$

$$2 = \frac{\quad}{2}$$

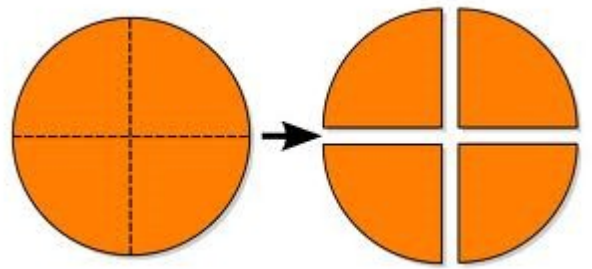
$$4 = \frac{\quad}{4}$$

$$7 = \frac{\quad}{7}$$

$$3 = \frac{\quad}{10}$$

$$5 = \frac{\quad}{6}$$

# Les fractions



Ecris ces nombres entiers sous forme de fractions.

$$5 = \frac{\quad}{3}$$

$$9 = \frac{\quad}{4}$$

$$2 = \frac{\quad}{7}$$

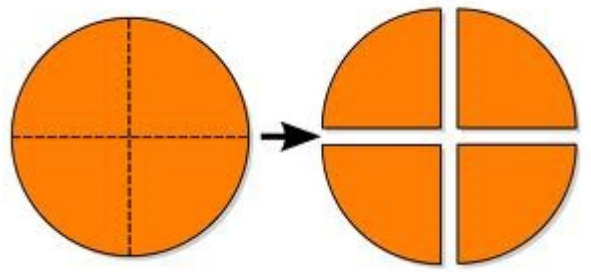
$$4 = \frac{\quad}{2}$$

$$8 = \frac{\quad}{9}$$

$$3 = \frac{\quad}{8}$$

$$1 = \frac{\quad}{5}$$

# Les fractions



Ecris ces nombres entiers  
sous forme de fractions.

$$9 = \frac{\quad}{8}$$

$$5 = \frac{\quad}{6}$$

$$1 = \frac{\quad}{4}$$

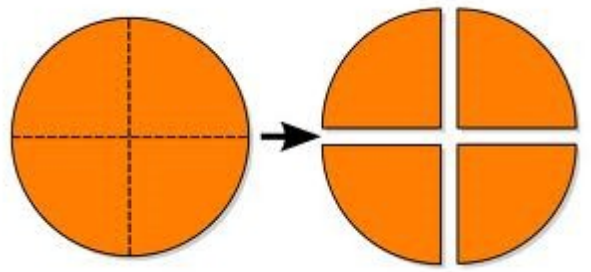
$$8 = \frac{\quad}{5}$$

$$6 = \frac{\quad}{9}$$

$$4 = \frac{\quad}{10}$$

$$2 = \frac{\quad}{3}$$

# Les fractions



Ecris ces nombres entiers  
sous forme de fractions.

$$2 = \frac{\quad}{7}$$

$$9 = \frac{\quad}{5}$$

$$6 = \frac{\quad}{9}$$

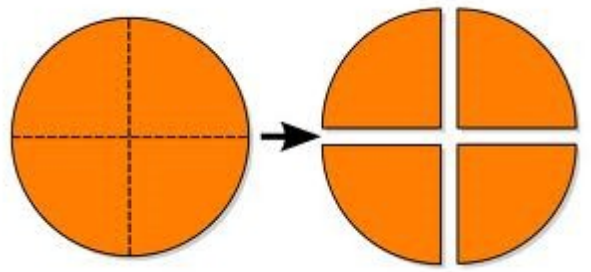
$$7 = \frac{\quad}{2}$$

$$3 = \frac{\quad}{6}$$

$$5 = \frac{\quad}{10}$$

$$1 = \frac{\quad}{4}$$

# Les fractions



Ecris ces nombres entiers  
sous forme de fractions.

$$7 = \frac{\quad}{6}$$

$$2 = \frac{\quad}{2}$$

$$4 = \frac{\quad}{7}$$

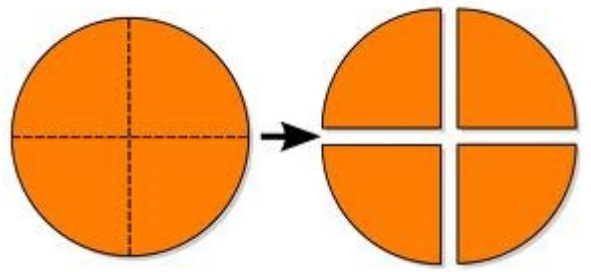
$$8 = \frac{\quad}{5}$$

$$3 = \frac{\quad}{10}$$

$$9 = \frac{\quad}{3}$$

$$7 = \frac{\quad}{8}$$

# Les fractions



Ecris ces nombres entiers  
sous forme de fractions.

$$5 = \frac{\quad}{8}$$

$$4 = \frac{\quad}{9}$$

$$7 = \frac{\quad}{2}$$

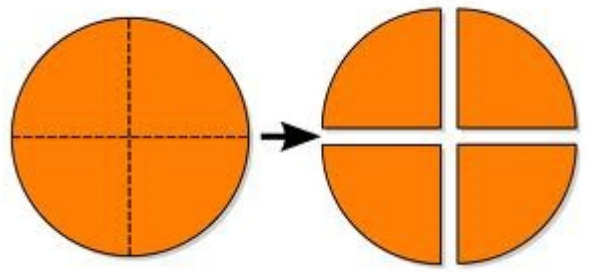
$$8 = \frac{\quad}{4}$$

$$6 = \frac{\quad}{7}$$

$$3 = \frac{\quad}{6}$$

$$1 = \frac{\quad}{10}$$

# Les fractions



Ecris ces nombres entiers  
sous forme de fractions.

$$6 = \frac{\quad}{3}$$

$$2 = \frac{\quad}{9}$$

$$7 = \frac{\quad}{6}$$

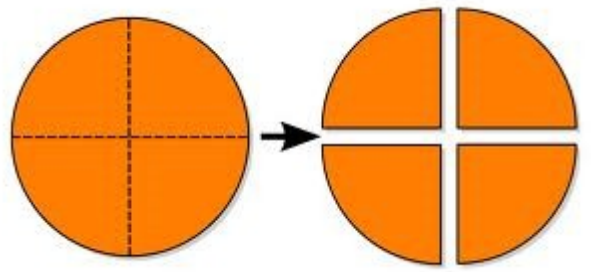
$$4 = \frac{\quad}{3}$$

$$9 = \frac{\quad}{9}$$

$$3 = \frac{\quad}{6}$$

$$1 = \frac{\quad}{3}$$

# Les fractions



Ecris ces nombres entiers  
sous forme de fractions.

$$2 = \frac{\quad}{4}$$

$$6 = \frac{\quad}{10}$$

$$5 = \frac{\quad}{7}$$

$$8 = \frac{\quad}{4}$$

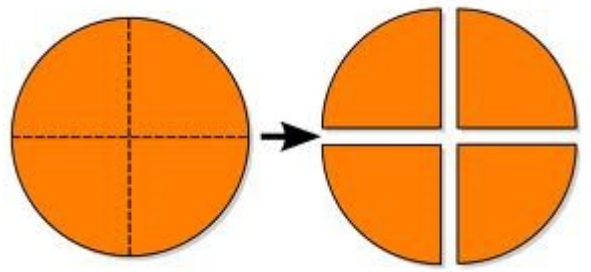
$$3 = \frac{\quad}{10}$$

$$4 = \frac{\quad}{7}$$

$$1 = \frac{\quad}{4}$$



# Les fractions



Ecris ces nombres entiers  
sous forme de fractions.

$$6 = \frac{\quad}{5}$$

$$2 = \frac{\quad}{2}$$

$$8 = \frac{\quad}{8}$$

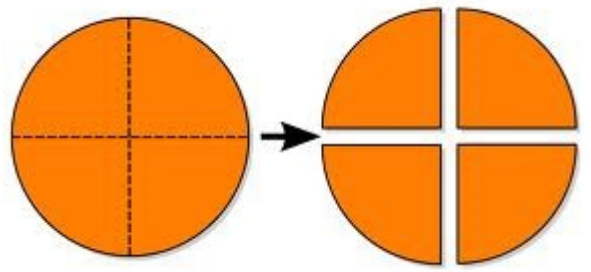
$$9 = \frac{\quad}{5}$$

$$5 = \frac{\quad}{2}$$

$$7 = \frac{\quad}{8}$$

$$3 = \frac{\quad}{5}$$

# Les fractions



Ecris ces nombres entiers  
sous forme de fractions.

$$8 = \frac{\quad}{6}$$

$$6 = \frac{\quad}{3}$$

$$4 = \frac{\quad}{9}$$

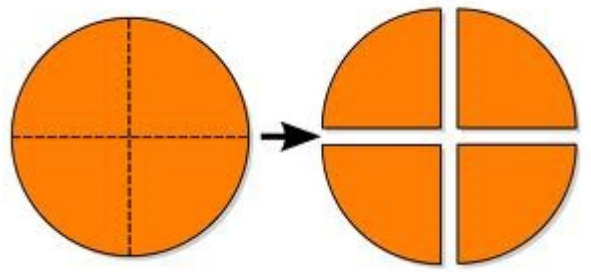
$$7 = \frac{\quad}{6}$$

$$9 = \frac{\quad}{3}$$

$$1 = \frac{\quad}{9}$$

$$3 = \frac{\quad}{6}$$

# Les fractions



Ecris ces nombres entiers  
sous forme de fractions.

$$1 = \frac{\quad}{7}$$

$$4 = \frac{\quad}{4}$$

$$2 = \frac{\quad}{10}$$

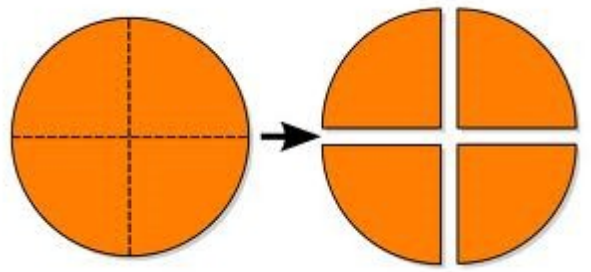
$$9 = \frac{\quad}{7}$$

$$7 = \frac{\quad}{4}$$

$$8 = \frac{\quad}{10}$$

$$5 = \frac{\quad}{7}$$

# Les fractions



Ecris ces nombres entiers  
sous forme de fractions.

$$3 = \frac{\quad}{8}$$

$$5 = \frac{\quad}{5}$$

$$6 = \frac{\quad}{2}$$

$$8 = \frac{\quad}{8}$$

$$2 = \frac{\quad}{5}$$

$$9 = \frac{\quad}{2}$$

$$1 = \frac{\quad}{8}$$