
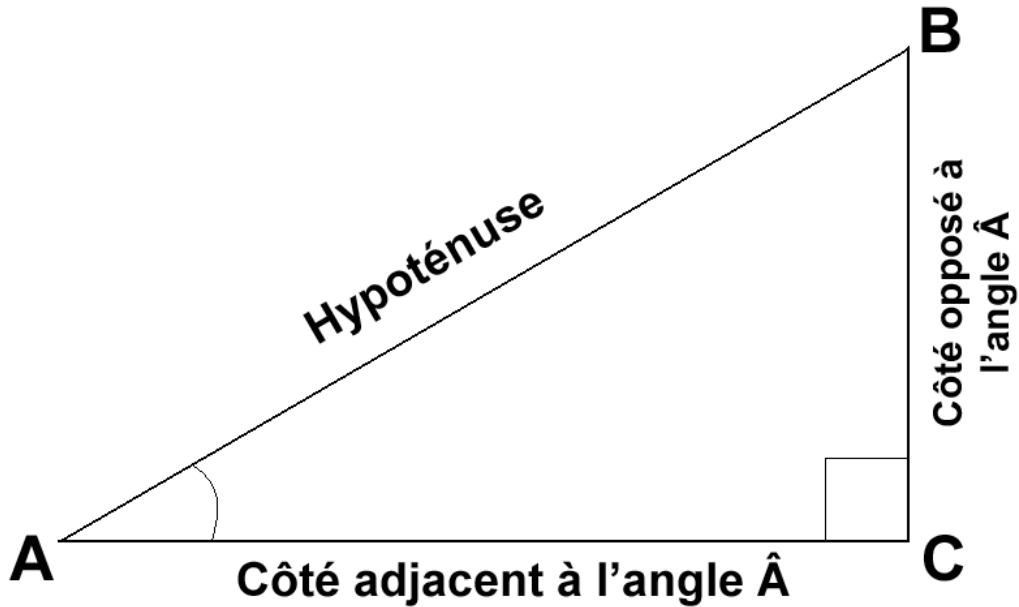


# Les triangles rectangles

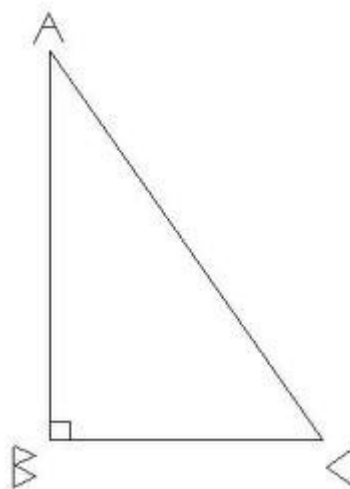


En quel sommet le triangle est rectangle ?



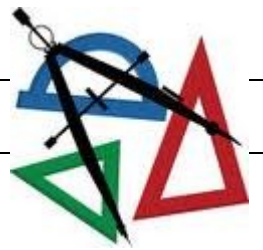
Ce triangle est rectangle en ..... donc l'angle ..... =  $90^\circ$

En quel sommet le triangle est rectangle ?

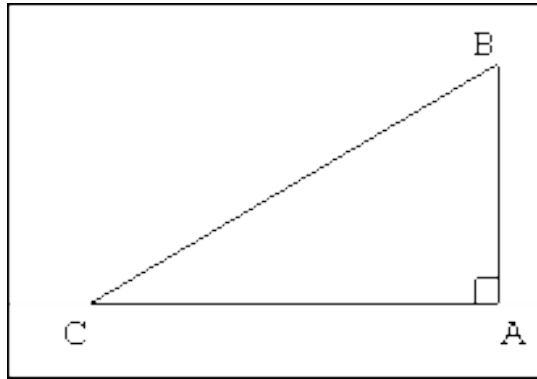


Ce triangle est rectangle en ..... donc l'angle ..... =  $90^\circ$

# Les triangles rectangles

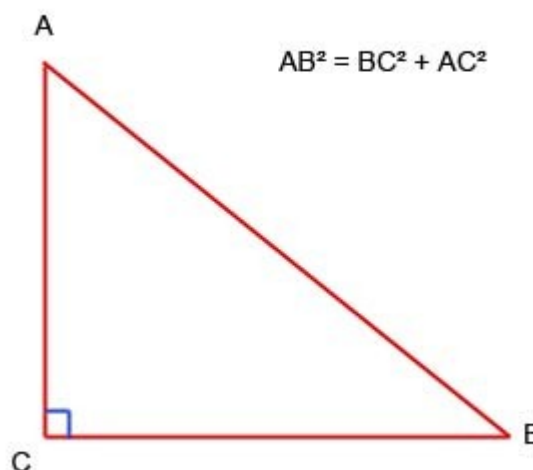


En quel sommet le triangle est rectangle ?



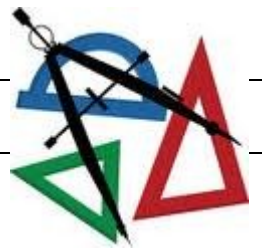
Ce triangle est rectangle en ..... donc l'angle ..... =  $90^\circ$

En quel sommet le triangle est rectangle ?

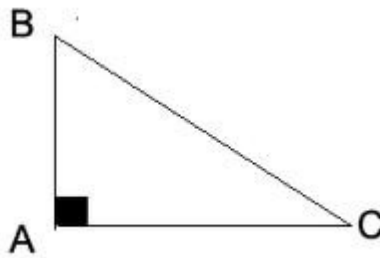


Ce triangle est rectangle en ..... donc l'angle ..... =  $90^\circ$

# Les triangles rectangles

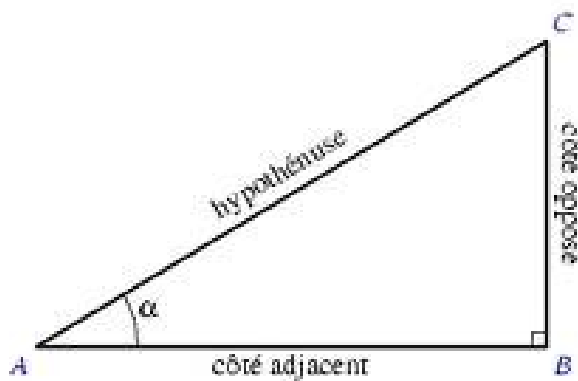


En quel sommet le triangle est rectangle ?




Ce triangle est rectangle en ..... donc l'angle ..... =  $90^\circ$

En quel sommet le triangle est rectangle ?

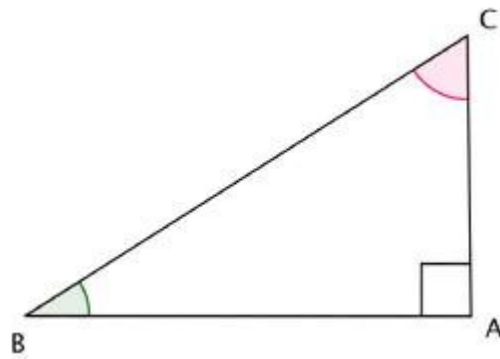


Ce triangle est rectangle en ..... donc l'angle ..... =  $90^\circ$

# Les triangles rectangles

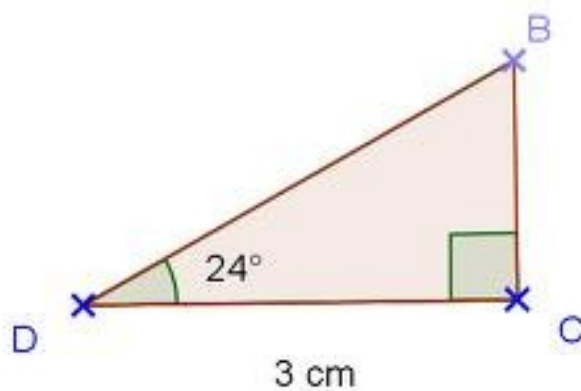


En quel sommet le triangle est rectangle ?




Ce triangle est rectangle en ..... donc l'angle ..... =  $90^\circ$

En quel sommet le triangle est rectangle ?

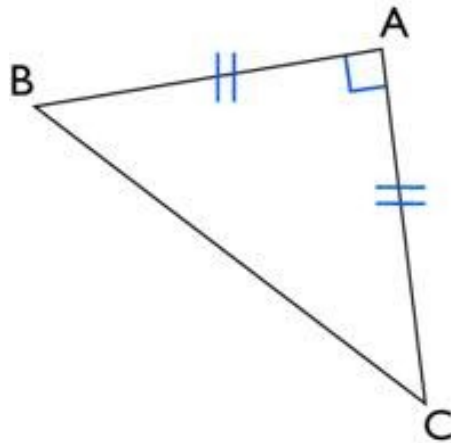


Ce triangle est rectangle en ..... donc l'angle ..... =  $90^\circ$

# Les triangles rectangles

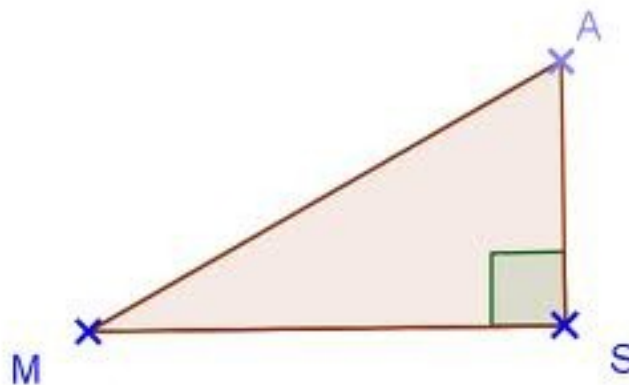


En quel sommet le triangle est rectangle ?




Ce triangle est rectangle en ..... donc l'angle ..... =  $90^\circ$

En quel sommet le triangle est rectangle ?

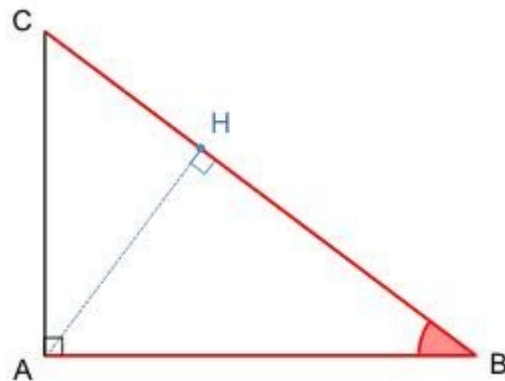


Ce triangle est rectangle en ..... donc l'angle ..... =  $90^\circ$

# Les triangles rectangles

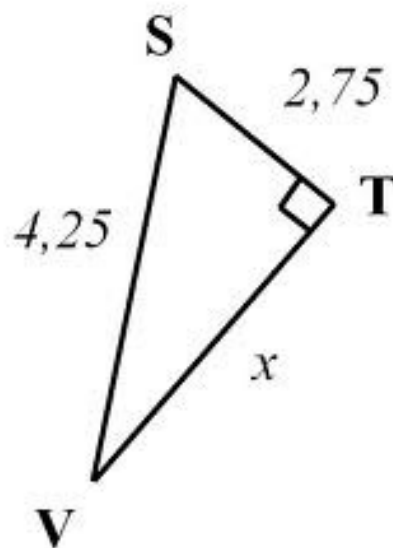


En quel sommet le triangle est rectangle ?



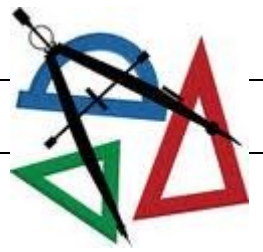
Ce triangle est rectangle en ..... donc l'angle ..... =  $90^\circ$

En quel sommet le triangle est rectangle ?

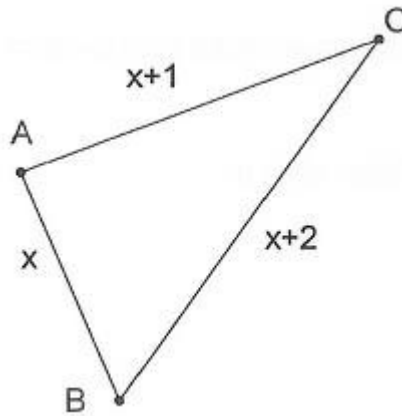


Ce triangle est rectangle en ..... donc l'angle ..... =  $90^\circ$

# Les triangles rectangles

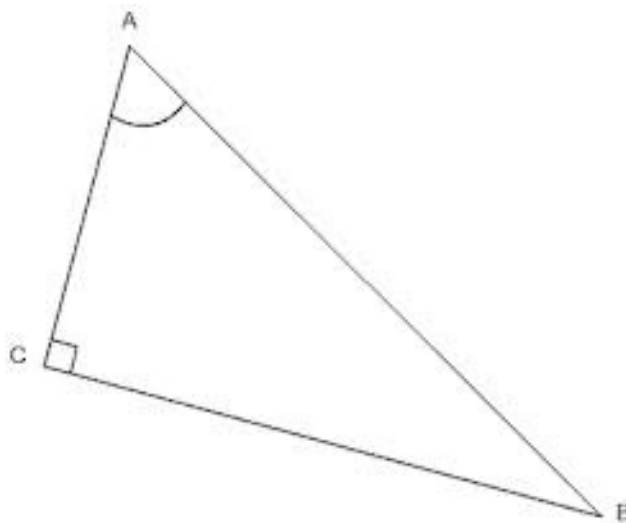


En quel sommet le triangle est rectangle ?




Ce triangle est rectangle en ..... donc l'angle ..... =  $90^\circ$

En quel sommet le triangle est rectangle ?



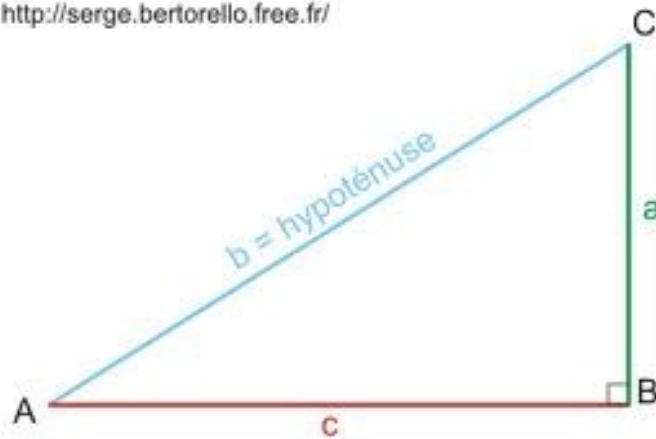
Ce triangle est rectangle en ..... donc l'angle ..... =  $90^\circ$

# Les triangles rectangles



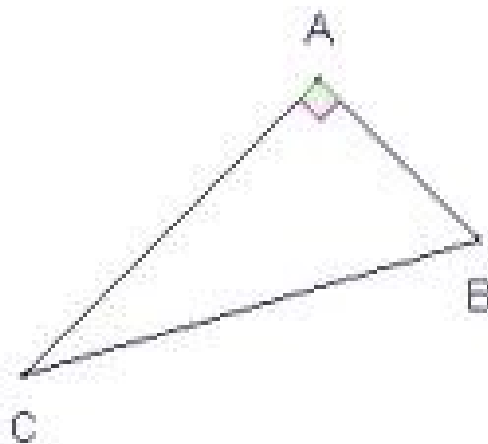
En quel sommet le triangle est rectangle ?

<http://serge.bertorello.free.fr/>



Ce triangle est rectangle en ..... donc l'angle ..... =  $90^\circ$

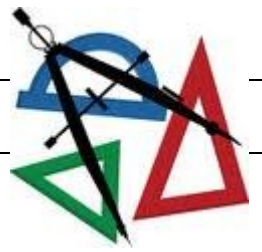
En quel sommet le triangle est rectangle ?



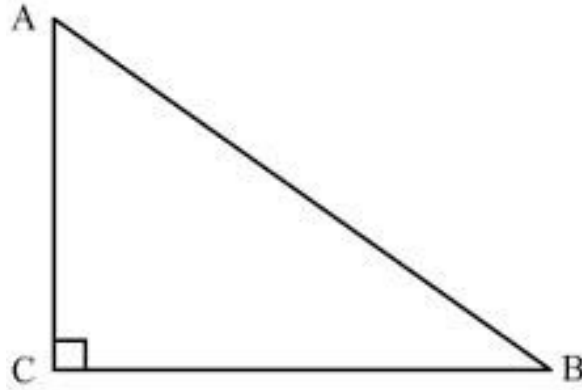
Ce triangle est rectangle en ..... donc l'angle ..... =  $90^\circ$



# Les triangles rectangles

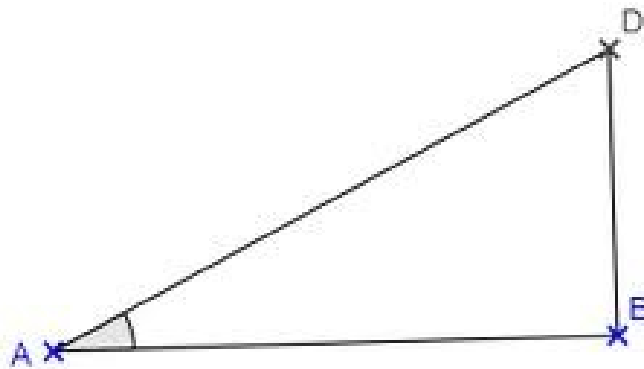


En quel sommet le triangle est rectangle ?



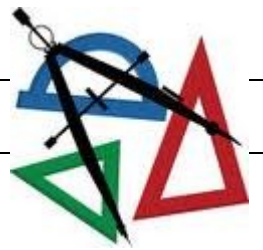
Ce triangle est rectangle en ..... donc l'angle ..... =  $90^\circ$

En quel sommet le triangle est rectangle ?

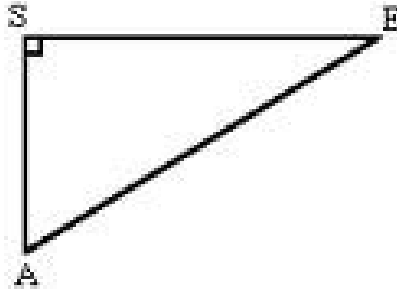


Ce triangle est rectangle en ..... donc l'angle ..... =  $90^\circ$

# Les triangles rectangles

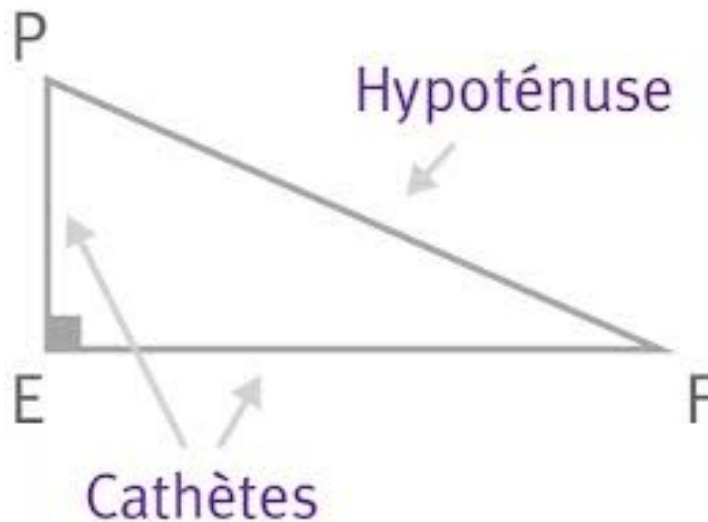


En quel sommet le triangle est rectangle ?



Ce triangle est rectangle en ..... donc l'angle ..... =  $90^\circ$

En quel sommet le triangle est rectangle ?



Ce triangle est rectangle en ..... donc l'angle ..... =  $90^\circ$